





# Table of Contents

## Getting Started

*Fun Time!* ..... 4

*Write It!* ..... 5

## Making Fractions Equivalent

*Area Model Activity Board* ..... 6

*For the Love of Pizza* Activity Sheet ..... 7

*Pizza Party* Assessment ..... 8

## Adding and Subtracting Fractions

*Adding and Subtracting Fractions Activity Board* ..... 9

*Fraction Fun* Activity Sheet ..... 10

*Lots of Laps* Assessment ..... 11

## Multiplying Fractions

*Visual Models Activity Board* ..... 12

*More Visual Models* Sheet ..... 13

*Cooks in the Kitchen* Activity Sheet ..... 14

*Cooking Up Fractions* Assessment ..... 15

## Working with Fractions and Decimals

*Fraction Grids Activity Board* ..... 16


*Blank Grids* Sheet ..... 17


*Terrific Trees* Activity Sheet ..... 18

*Fractions and Decimals, Naturally* Assessment ..... 19

**My Journal** ..... 20

**Glossary** ..... 24



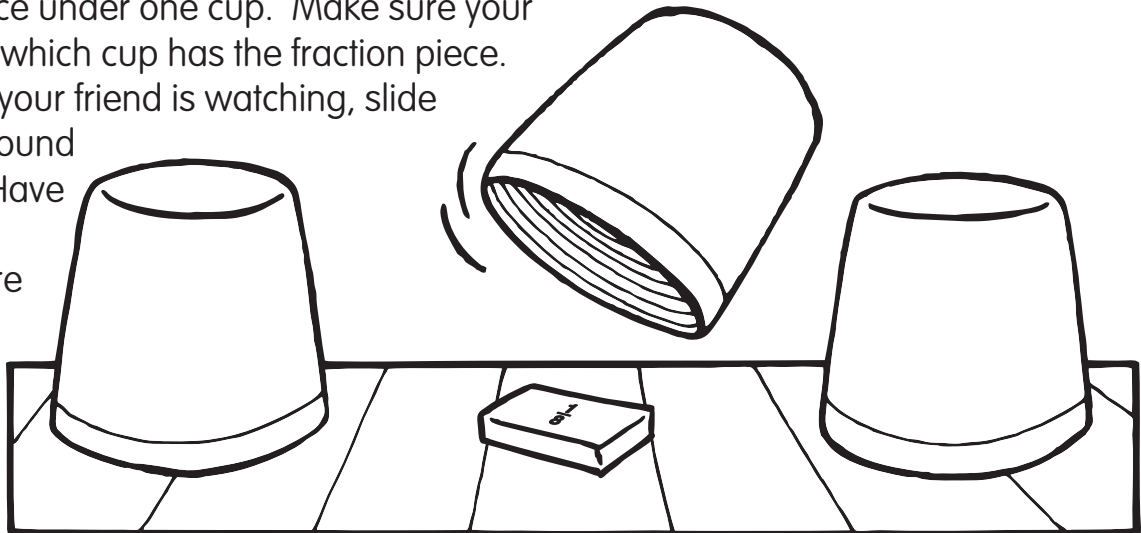


# Fun Time!

## Watch Closely


Play this game with a partner. Place three cups upside down on the table. Place a red fraction piece under one cup. Make sure your friend sees which cup has the fraction piece.

Then while your friend is watching, slide the cups around the table. Have your friend guess where the fraction piece is.



## Stack Them Up!

Stack the fraction pieces to build a tower. See how tall you can build your tower before it falls over. Count how many pieces you were able to stack.



## Pattern Time

Use the fraction pieces to make a pattern. Ask a partner to name the pattern you created. Try to make a difficult pattern that will be harder to guess.


## Sort Without Seeing

Place a pile of fraction pieces in front of you. Close your eyes tight. Feel the pieces and try to sort them by size using only your fingers to feel the pieces.

## Picture Perfect

Use the fraction pieces to form a picture of something in the real world, such as an animal, a person, a place, or a thing.






# Fraction Grids Activity Board

**Hundredths**

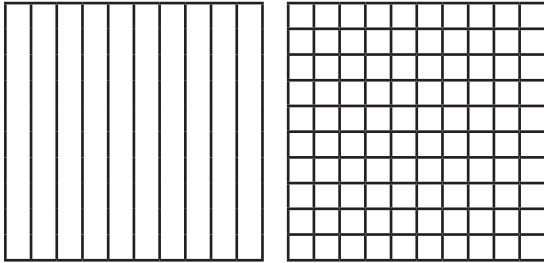

**Tenths**

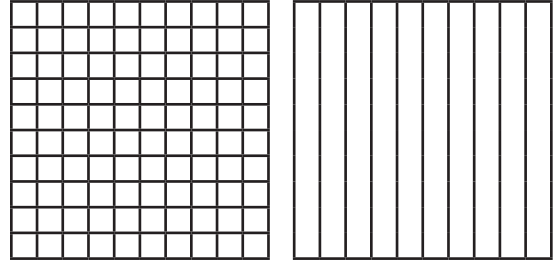
# Fractions and Decimals, Naturally

**Directions:** Add the fractions.

**1**  $\frac{5}{10} + \frac{32}{100} =$  \_\_\_\_\_



**2**  $\frac{75}{100} + \frac{2}{10} =$  \_\_\_\_\_



**Directions:** Write each fraction as a decimal.

**3**  $\frac{45}{100}$  \_\_\_\_\_

**4**  $\frac{25}{100}$  \_\_\_\_\_

**5**  $\frac{5}{10}$  \_\_\_\_\_

**6**  $\frac{7}{10}$  \_\_\_\_\_

**Directions:** Write  $>$ ,  $<$ , or  $=$  to compare the decimals.

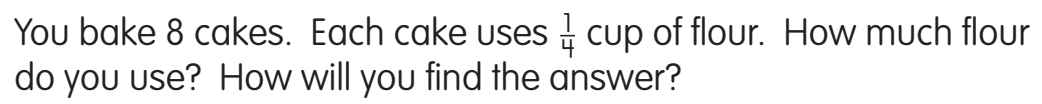
**7**  $0.45 \bigcirc 0.75$

**8**  $0.20 \bigcirc 0.15$

**9**  $0.4 \bigcirc 0.04$

**10**  $0.28 \bigcirc 0.88$



This image shows a single sheet of white paper with horizontal ruling lines. The lines are evenly spaced and run across the width of the page. There are no margins, text, or other markings on the paper.