



This book belongs to

Place Value



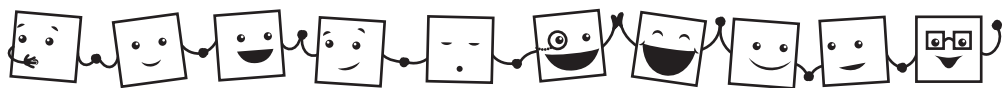


Table of Contents

Getting Started

| | |
|-------------------------|---|
| <i>Play Time!</i> | 4 |
| <i>Match It!</i> | 6 |

Using a Ten Frame (1–10)

| | |
|---|---|
| <i>Ten Frame Activity Board</i> | 7 |
| <i>Mooooo Math Activity Sheet</i> | 8 |
| <i>Piggy Problems Assessment</i> | 9 |

Ten and Some Ones (11–19)

| | |
|---|----|
| <i>Ten and Some Ones Activity Board</i> | 10 |
| <i>Counting Crabs Activity Sheet</i> | 11 |
| <i>Jumping Jellyfish Assessment</i> | 12 |

Beginning Place Value

| | |
|---|----|
| <i>Place Value Activity Board</i> | 13 |
| <i>Busy Bees Activity Sheet</i> | 14 |
| <i>Beautiful Butterflies Assessment</i> | 15 |



Counting by Tens


| | |
|---|----|
| <i>Skip Counting Activity Board</i> | 16 |
| <i>T. rex and Tens Activity Sheet</i> | 17 |
| <i>Mathosaurus Assessment</i> | 18 |

| | |
|-------------------------|----|
| My Journal | 19 |
|-------------------------|----|

| | |
|--------------------------------|----|
| Place Value Chart | 23 |
|--------------------------------|----|


| | |
|-------------------------------|----|
| I Did It! Record | 24 |
|-------------------------------|----|





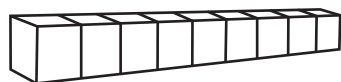
Play Time!

Look and Label



What is this piece called?

What color is it?



What is this piece called?

What color is it?

Tap a Tune!



Use two green rods like drumsticks and pretend to tap out one of the tunes below. Hum the tune as you tap and have a partner guess the tune.



"Twinkle, Twinkle, Little Star"




"Old MacDonald Had a Farm"



"B-I-N-G-O"



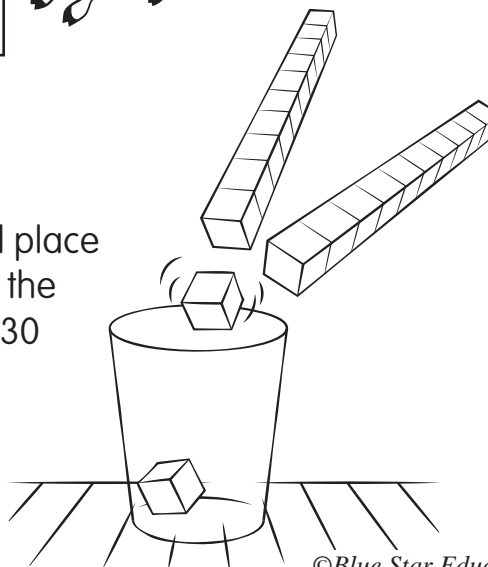
"London Bridge"




"Mary Had a Little Lamb"

Cubes in a Cup

Use two green rods to pick up yellow cubes and place them in a cup. How many cubes can you get in the cup in 30 seconds? Have your partner count to 30 for you.






Ten Frame Activity Board







| | | | | |
|--|--|--|--|--|
| | | | | |
| | | | | |
| | | | | |
| | | | | |
| | | | | |

| | |
|----------------------|----|
| <input type="text"/> | 1 |
| <input type="text"/> | 2 |
| <input type="text"/> | 3 |
| <input type="text"/> | 4 |
| <input type="text"/> | 5 |
| <input type="text"/> | 6 |
| <input type="text"/> | 7 |
| <input type="text"/> | 8 |
| <input type="text"/> | 9 |
| <input type="text"/> | 10 |



Busy Bees




Directions: Do they match? If the number of bees matches the number on the hive, draw a happy face. If they do not match, draw a sad face. 😊 ☹️



| | | |
|---|---|--|
|  |  |  |
|  |  |  |

Directions: How many tens and ones are in each number?

| | |
|--|--|
| <div style="border: 1px solid black; padding: 10px; margin: 0 auto; width: 100px; height: 100px; display: flex; align-items: center; justify-content: center; font-size: 40px; font-weight: bold;">12</div> <div style="display: flex; justify-content: space-around; margin-top: 10px;"> <div style="border: 1px solid black; width: 100px; height: 100px;"></div> <div style="border: 1px solid black; width: 100px; height: 100px;"></div> </div> <div style="display: flex; justify-content: space-around; margin-top: 5px;"> Tens Ones </div> | <div style="border: 1px solid black; padding: 10px; margin: 0 auto; width: 100px; height: 100px; display: flex; align-items: center; justify-content: center; font-size: 40px; font-weight: bold;">19</div> <div style="display: flex; justify-content: space-around; margin-top: 10px;"> <div style="border: 1px solid black; width: 100px; height: 100px;"></div> <div style="border: 1px solid black; width: 100px; height: 100px;"></div> </div> <div style="display: flex; justify-content: space-around; margin-top: 5px;"> Tens Ones </div> |
|--|--|

Directions: Which bee has the number 5 in the ones place? Color it!





Pretend you were having a picnic. Fourteen ants tried to steal some of your food. How can you break apart the number 14?

I know place value.

I know what 14 means.

It means:

| Tens | Ones |
|------|------|
| 1 | 4 |
